

Riviera International Academy












Assignment-2077

(Ashad 04, 2077, Thursday)

Class One

Subject - Mathematics

Count the number of circles and decide if it is an even number or an odd number.

- Ex.  8 Even Odd
1.  \_\_\_\_\_ Even Odd
2.  \_\_\_\_\_ Even Odd
3.  \_\_\_\_\_ Even Odd
4.  \_\_\_\_\_ Even Odd
5.  \_\_\_\_\_ Even Odd
6.  \_\_\_\_\_ Even Odd
7.  \_\_\_\_\_ Even Odd
8.  \_\_\_\_\_ Even Odd
9.  \_\_\_\_\_ Even Odd
10.  \_\_\_\_\_ Even Odd

विषय - नेपाली

गृहकार्य : पेज नं. १९ मा भएका अभ्यासहरू कापीमा गर ।

**Subject- English**

Let us play a name-game! Write the name of any person, place, animal and thing beginning with the given letters. You may use the words given in the box or find new words. The first row has been done for you.

brother snake bear papa bat plate beach peacock

	Person	Place	Animal	Thing
S	sister	school	 .....	shirt
B	.....	.....	.....	.....
P	.....	playground	 .....	.....

**The End.**