

Riviera International Academy





Assignment-2077

(Ashad 30, 2077, Tuesday)

Class: U. Kg. Date:- _____ Name:- _____

Subject - Science

Draw any four foods that you like and color it.



Subject- Mathematics

1. Circle the tallest picture given below.



Learning Measurement

Worksheet 1: Which is the Tallest?

Parents, help your child to identify which picture is the tallest in each box and circle it.

