

Riviera International Academy





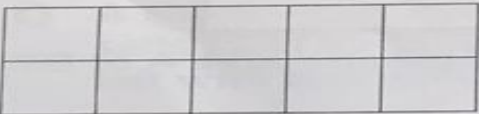



Assignment-2077

(Ashwin 05, 2077, Monday)

Class: Two

Subject- Mathematics

1. Now, let's tell and write the area of these figures.

	
Area is _____ square rooms.	Area is _____
	
Area is _____ square rooms.	Area is _____
	
Area is _____ square rooms.	Area is _____
	
Area is _____ square rooms.	Area is _____

Subject- Social Studies

1. List the names of 4 public properties.
2. Do ex II of page no.51 in copy.

Subject- Science

Answer the following questions.

- (a) Write any five use of plants.
- (b) Name any two plants their roots are used as vegetables.
- (c) Name any four plants that give us pulses.
- (d) Name any four medicinal plants.

The End.