

Riviera International Academy


Assignment-2077


(Shrawan 13, 2077, Tuesday)


Class: Five


Subject- Mathematics

4. Let's tell and write the correct numbers in the blank spaces.

a)  $4 \times 2 = 8$ and $8 \div 4 = 2$

b)  $\underline{\quad} \times \underline{\quad} = \underline{\quad}$ and $15 \div 5 = \underline{\quad}$

c)  $\underline{\quad} \times \underline{\quad} = \underline{\quad}$ and $\underline{\quad} \div \underline{\quad} = \underline{\quad}$

d)  $\underline{\quad} \times \underline{\quad} = \underline{\quad}$ and $\underline{\quad} \div \underline{\quad} = \underline{\quad}$

5. Quiz time !

- a) The product of two numbers is 42 and one of them is 7.
The other number is _____
- b) Multiplicand is 9 and the product is 72. Multiplier is _____
- c) Multiplier is 10 and the product is 100. Multiplicand is _____
- d) The quotient of 54 divided by a number is 6. The number is _____
- e) Dividend is 42, divisor is 8, quotient = _____ remainder = _____

6. Puzzle time !

a) Let's fill in the missing numbers to complete the sums.

	\times	5	=	20
\times		\times		\times
	\times		=	
=		=		=
12	\times		=	120

72	+		=	8
\div		\div		\div
	+	3	=	2
=		=		=
	+		=	

	\div	3	=	0
\times		\times		\times
	+		=	2
=		=		=
	+	9	=	10

Subject- Social Studies

1. Write three kinds of work Maiti Nepal does?
2. Who gets shelter in Maiti Nepal?
3. Who joins the celebration of Indraajatra on the third day

Subject- Extra Reading

Create story using outline

1. The Ant and The Grasshopper

Oncea hard working ant and a grasshopperant worked all summer and collected food for wintergrasshopper spent by singingwent to the antbeg food in the winterthe ant told him to go and dance.

The End.