

Riviera International Academy

Assignment-2077

(Shrawan 25, 2077, Sunday)

Class: Six

Subject- English

1. Fill in the blanks by using the verbs given in brackets in the correct tense.

The ancient Egyptians (live) in a complete way—while they (build) a magnificent civilization, they never (forget) leisure and recreation. The ancient Egyptians mostly (play) board games. Senet (be) a popular board game in their days. The game (symbol) the struggle of good against evil. Senet boards (be) made of ivory and ebony. Sometimes the board (be) made of plain, undecorated wood. All boards (have) a drawer to keep the counters.



2. Fill in the blanks by using the verbs given in brackets in the correct tense.

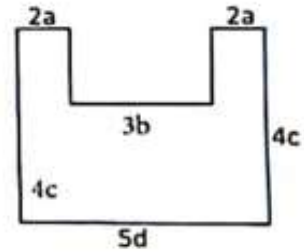
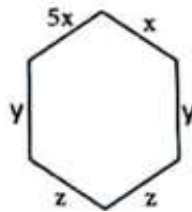
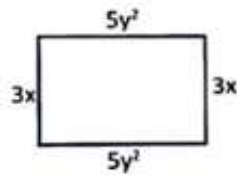
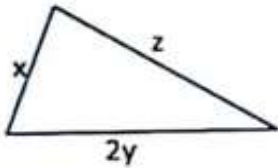
When you (reach) the post office, you (see) a man standing at the gate, wearing a blue T-shirt and a green baseball cap. Walk up to him and say, 'The sky is not so blue today.' This password (help) him recognize you and he (hand) you an envelope. Hide the envelope and leave at once. As you (turn) the corner, you (see) a silver-grey car with the license-plate number 0987. Walk up to the car. There (be) no one inside except the driver. The driver (not look) at you. Don't stop there but just walk past the car. As you (walk) past, you (notice) that the driver (lower) the windowpane. Throw the envelope in and walk away. That is all you (have) to do.

3. Given below is a passage about the world's largest tree house. Fill in the correct form of the verbs to complete the article that Ranjita has written for her school magazine.

In 1993, Minister Horace Burgess (start) the construction of the largest tree house in the world. This is (make) of nothing but reclaimed,

Subject- Mathematics

Find algebraic expression for perimeters of the following geometrical shapes:



Subject- Science

- What is temperature? Write its SI unit.
- What are the effects of heat?
- Name any three devices that change electricity to heat energy.
- Differentiate between bio fuel and fossil fuel.

Subject- Computer

Write the full forms of the following:

- a. GUI b. VDT c. CRT d. LCD e. LED

State whether the following statements are true or false.

- A peripheral device that is used to enter data and instructions is input device.
- Scanner and web camera are input devices.
- A keyboard is used to draw pictures in a computer.
- A computer mouse is normally used to enter text in a computer.
- A touch pad is a touch sensitive pad that allows us to point items on the screen like a computer mouse.
- A scanner converts text or pictures into digital form and transfers them to computer.
- Softcopy output device displays permanent outputs.
- The speaker presents the output in the audio format.
- A dot matrix printer uses laser beam technology.
- An inkjet printer forms characters by spraying ink on a paper.

The End.