

Class: Two

Subject- English

The Jackal and the Lions

Here are the names of some animals. Match these animals with their babies.

Animals	Babies
cat	calf
cow	cub
dog	colt
hen	kitten
lion	chick
horse	puppy
elephant	pup
jackal	calf

Subject- Computer

2. Mark a tick (✓) for the correct statement and a cross (✗) for the wrong statement.

- Keyboard and monitor are output devices. ()
- A monitor can only display texts. ()
- The display on the monitor is not permanent. ()
- A printer displays the output on a paper. ()
- Speaker and projector are also output devices. ()

विषय - नेपाली

स्रोत :

किताब : सरल नेपाली बाल व्याकरण र रचना

पाठ : सर्वनाम

पृष्ठ नं : १९

प्रश्न नं : १, २ र ३

गृहकार्य

१) तलका खाली ठाउँमा मिल्ने शब्द लेख :

- क) पढ्दैन, ऊ असफल हुन्छ । (जो, जुन, जसले)
ख) तिमीले ल्याएका छौ, त्यो मलाई देऊ । (जे, जुन, जसले)
ग) तिमीलाई लुगा मन पर्छ, त्यही लगाऊ । (जो, जुन, जसले)
घ) तिमीलाई आउँछ, त्यही लेख । (जे, जुन, जसले)
ङ) तिमीलाई मन पर्छ ? (को, जुन, जसले)

२) खाली ठाउँमा आफू आफू शब्द राख र पुरा वाक्य लेख :

- क) हामी मिलेर काम गर्छौ । = हामी आफू आफू मिलेर काम गर्छौ ।
ख) तिमीहरू भगडा नगर । = ।
ग) उनीहरू मिलेर घर गए । = ।
घ) हरिहरू विद्यालय जान्छन् । = ।
ङ) अम्बिकाहरू गृहकार्य गर्छन् । = ।


३) मिल्ने शब्द राखेर खाली ठाउँ भर :


राम र रमा मेरा साथीहरू हुन् । मिलनसार छन् ।
सबैसँग मिल्छु । मिलनसार छ, सबैको प्यारो हुन्छ ।
रमा मिहिनेती छिन् । कक्षामा प्रथम हुन्छिन् । हामी आफ्नो
काम गर्छौ । जानेको छ, त्यसले सिकाइदिन्छ ।
हामीलाई प्रश्नको उत्तर आउँदैन, गुरुसित
सोध्छौ । पहिले हामीलाई जानेनौ ? भनेर
सोध्नुहुन्छ अनि उत्तर भनिदिनुहुन्छ । उहाँको राम्रो बानी हो ।


उनीहरू, म,
जो, त्यो,
उनी, आफै,
जसले, जुन,
त्यो, उहाँ,
के, यो ।


Pictograph and Bar graphs

Next day your teacher ask a question to the class. The question is 'which is your favourite sports?' All the children of the class tell their favourite sports.

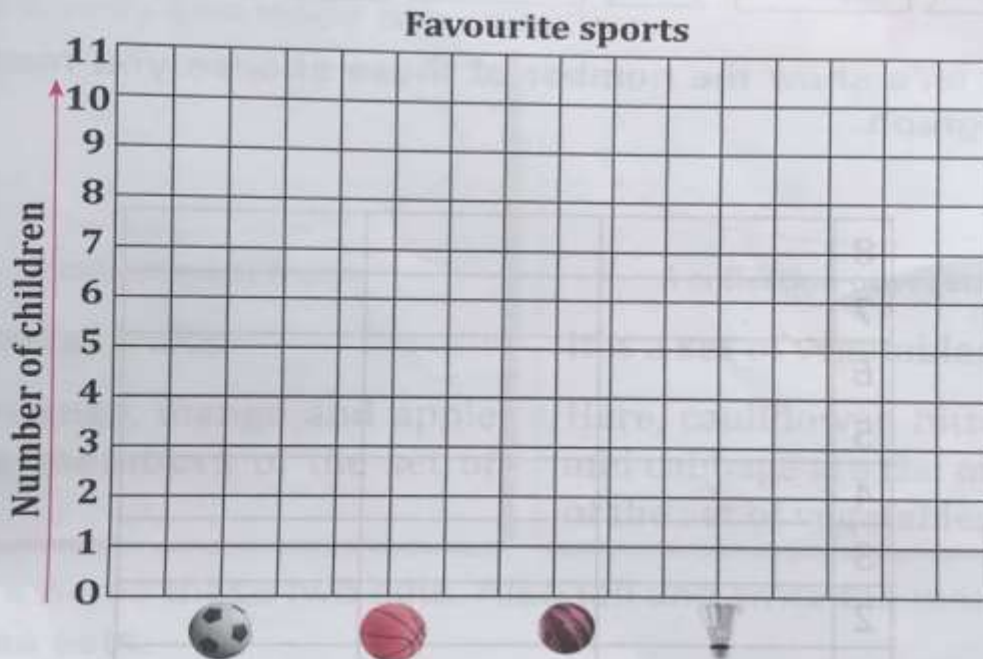
 10 children like football

 3 children like badminton

 8 children like basketball

 5 children like cricket

Now, it's your turn. Draw a bar graph to show the above information.



2. Let's study your bar graph and answer these questions.

- a) How many children like football?
- b) How many more children like basketball than cricket?
- c) How many students were asked the question?
- d) Which one is the most popular sport among them?
- e) What is the title of this bar graph?